



Advanced Kids Series
Second Terminal Evaluation - 2077



Subject : Maths

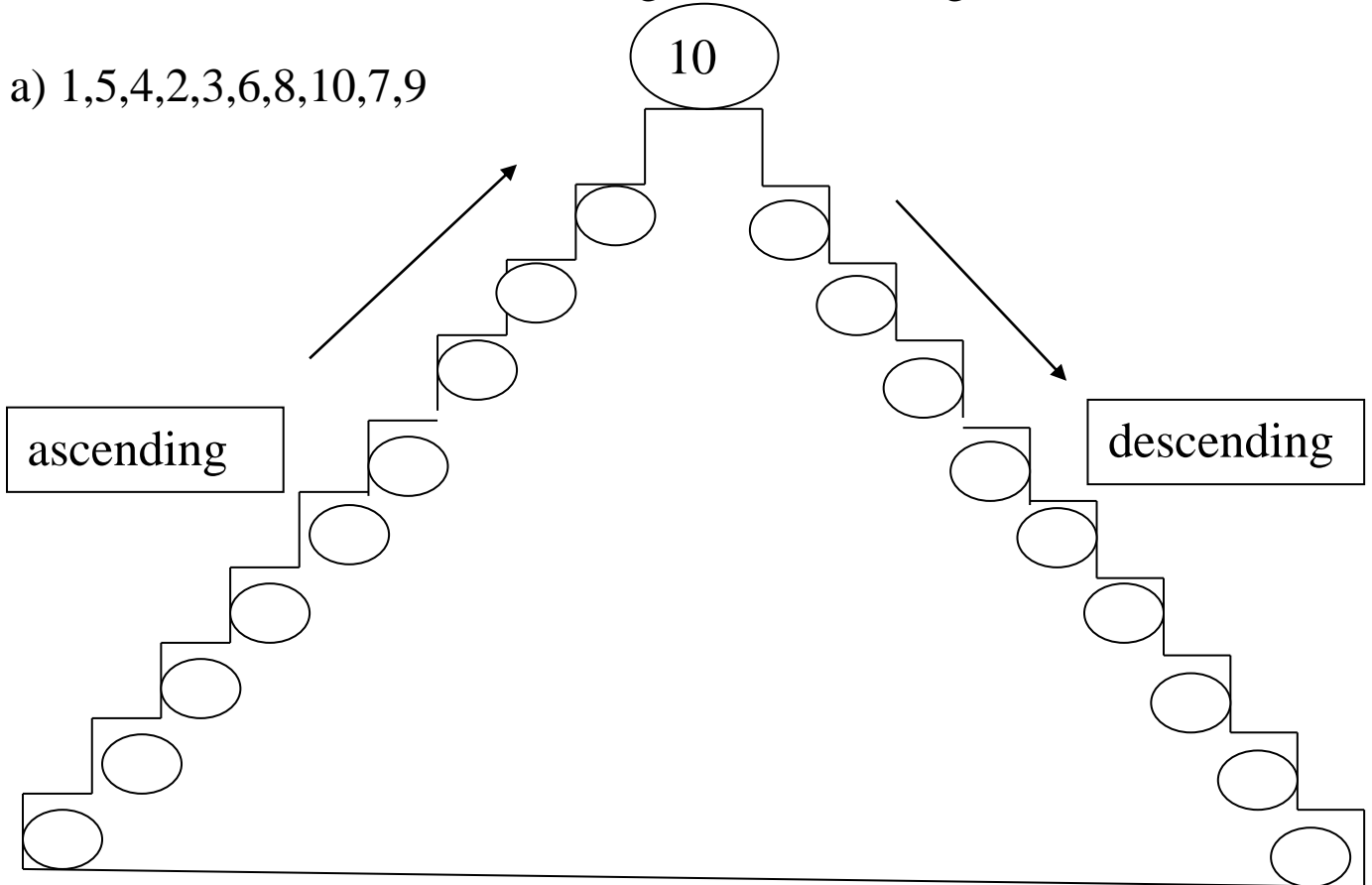
U K G

Name :

Roll No.

1. Write the numbers in ascending and descending order.

a) 1,5,4,2,3,6,8,10,7,9



b) 11 14 12 13 15

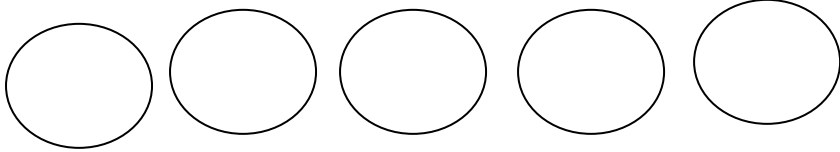
ascending

--	--	--	--	--

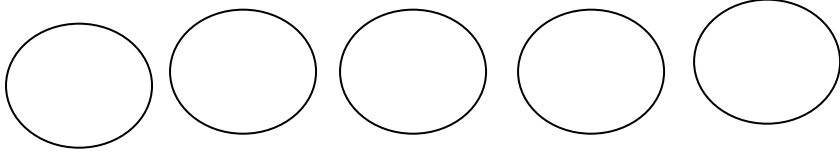
descending

--	--	--	--	--

c) 17 18 16 20 19



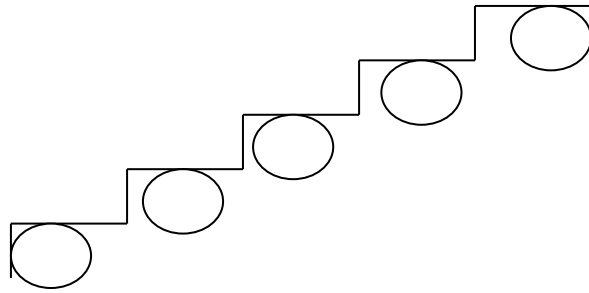
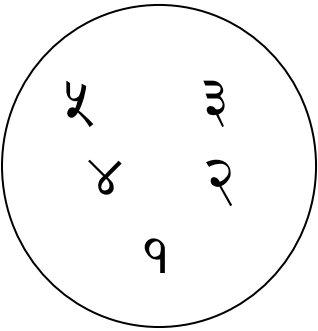
ascending



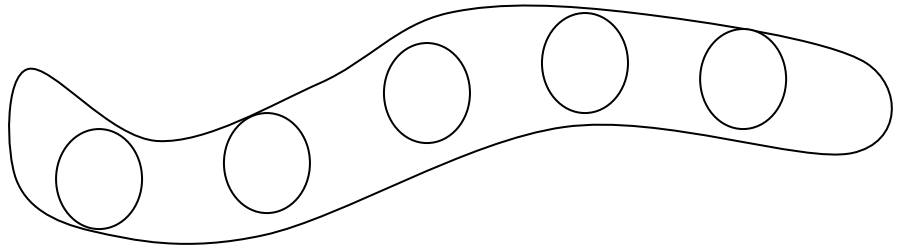
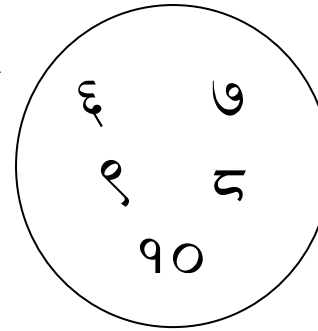
descending

२) बढ्दो कम अनुसारका अङ्क लेख्नुहोस् ।

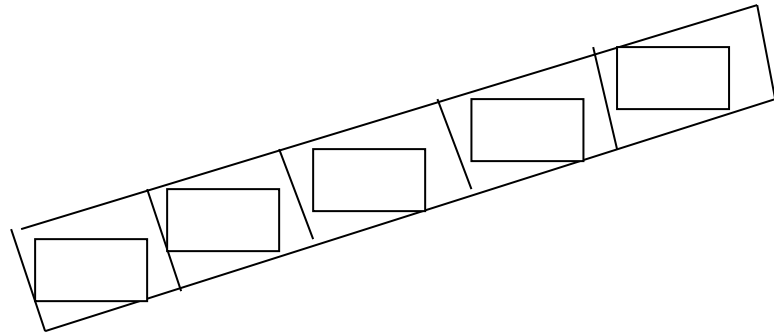
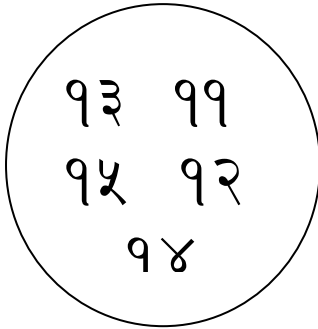
१.



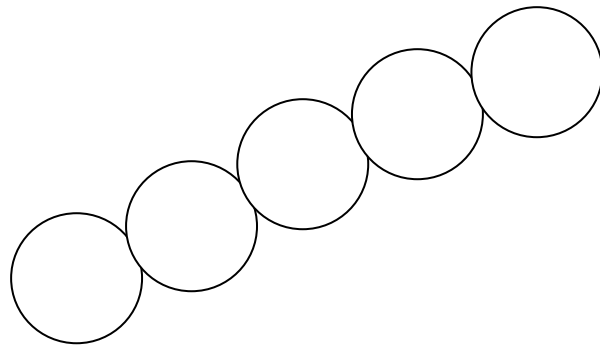
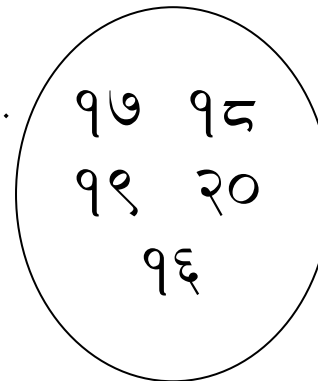
२.



३.

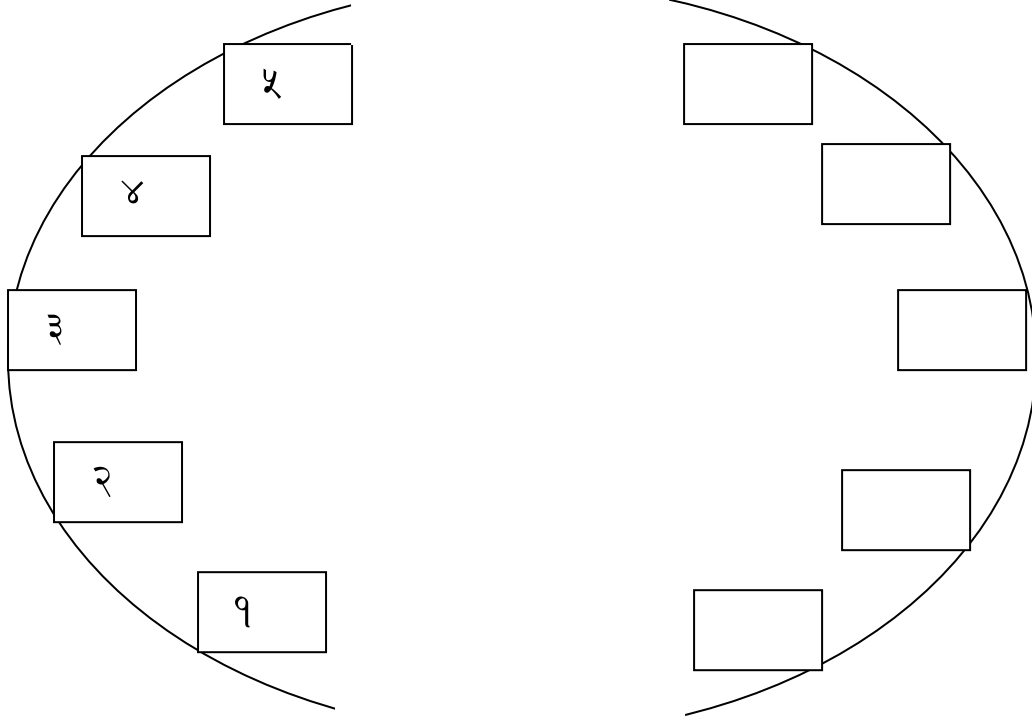


४.

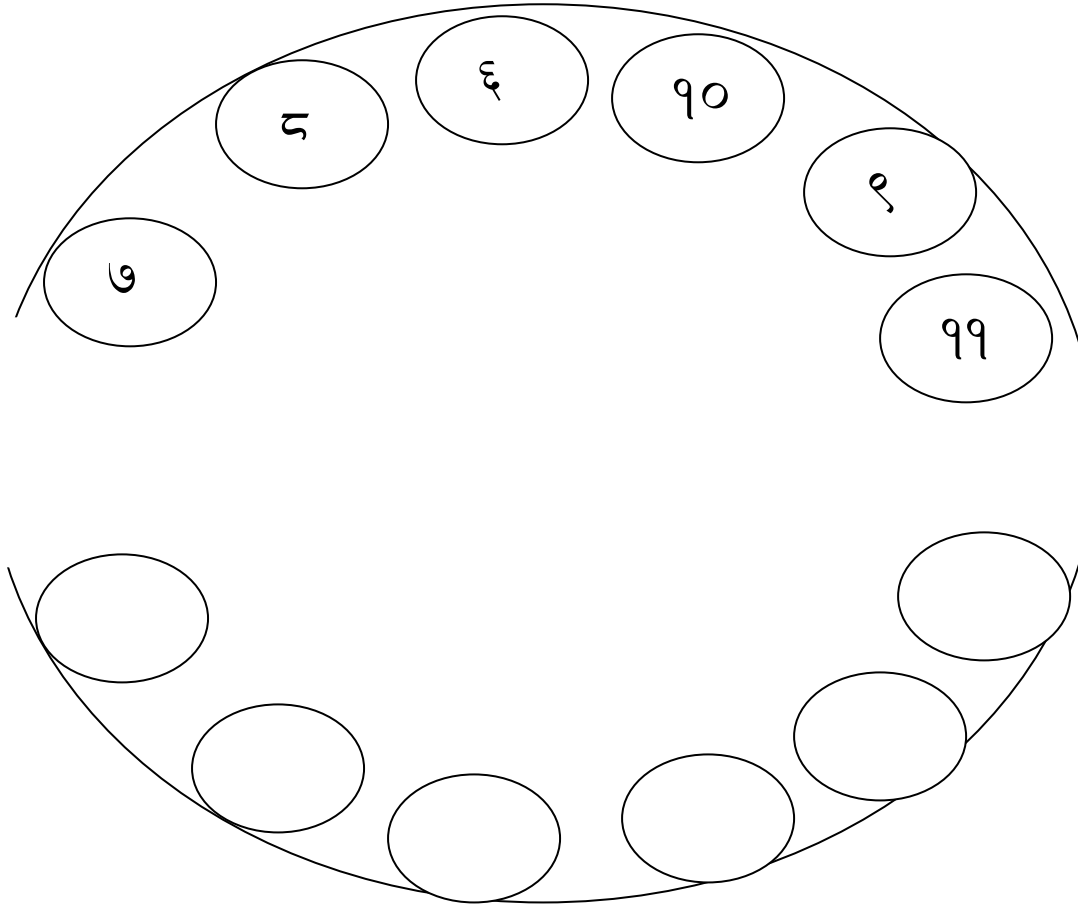


३) घट्टदो कड अनुसलरकल अडुक लेखुनहोसु ।

१.

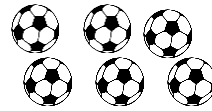
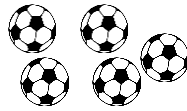
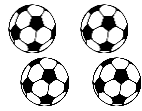
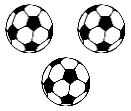


२.







4. How many altogether ?

a.



$$\boxed{3} + \boxed{4} + \boxed{5} + \boxed{6} = \boxed{}$$

There are altogether balls.



$$\boxed{4} + \boxed{6} + \boxed{9} + \boxed{6} = \boxed{}$$

There are altogether apples.

b. जोड गर्नुहोस् ।

$$\begin{array}{r} ३ \\ + ६ \\ \hline \end{array}$$

$$\begin{array}{r} ४ \\ + ४ \\ \hline \end{array}$$

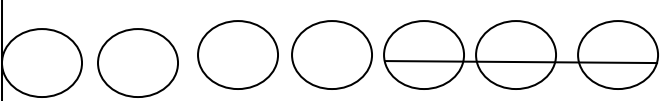



$$\begin{array}{r} २ \\ ३ \\ + ५ \\ \hline \end{array}$$

$$\begin{array}{r} २ \quad २ \\ + २ \quad २ \\ \hline \end{array}$$

$$\begin{array}{r} ४ \quad ४ \\ + ४ \quad ५ \\ \hline \end{array}$$

$$\begin{array}{r} ४ \quad १ \\ + १ \quad ४ \\ \hline \end{array}$$

५) घटाउ अङ्क लेख्नुहोस् ।


$$७ - ३ = \square$$

$$८ - ६ = \square$$

$$९ - ३ = \square$$

$$५ - ५ = \square$$
$$\begin{array}{r} ५ \\ - २ \\ \hline \square \end{array}$$
$$\begin{array}{r} ६ \\ - ४ \\ \hline \square \end{array}$$
$$\begin{array}{r} ७ \\ - ३ \\ \hline \square \end{array}$$

6) Solve the word problem by adding.

1. Ashu has five toffees and Jeshu has two toffees. How many toffees do they have altogether?

$$5 + 2 = \square$$

2. Nirvan has three pencils. Praharsh gives him six pencils. How many pencils does Nirvan have altogether?

$$3 + 6 = \square$$

7) Write the place value (Tens and Ones) correctly.

Numbers	Tens	Ones
10		
12		
14		
16		
18		
20		
22		
24		
26		
28		

8) Write the numbers in figure.

tens 3 and ones 0 =

tens 3 and ones 1 =

tens 3 and ones 2 =

tens 3 and ones 3 =

tens 3 and ones 4 =

tens 3 and ones 5 =

tens 3 and ones 6 =

tens 3 and ones 7 =

tens 3 and ones 8 =

tens 3 and ones 9 =

९) सोधिएको स्थानमा भएको अङ्कलाई गोलो घेरा लगाउनुहोस् ।

१ (५)	एक
-------	----

१ ७	दस
-----	----

२ १	एक
-----	----

२ ३	एक
-----	----

२ ५	दस
-----	----

२ ७	एक
-----	----

३ ०	दस
-----	----

१०) ठीक अङ्क राखी खाली ठाउँ भर्नुहोस् ।

$$३ \text{ दस र } \square \text{ एक} = ३१$$

$$३ \text{ दस र } २ \text{ एक} = \square$$

$$\square \text{ दस र } ३ \text{ एक} = ३३$$

$$\square \text{ दस र } ४ \text{ एक} = ३४$$

$$\square \text{ दस र } \square \text{ एक} = ३५$$

$$३ \text{ दस र } ६ \text{ एक} = \square$$

$$३ \text{ दस र } ७ \text{ एक} = \square$$

$$३ \text{ दस र } \square \text{ एक} = ३८$$

$$\square \text{ दस र } \square \text{ एक} = ३९$$